

# Provincies [1]

Nederland

Naam: .....

Groep: .....

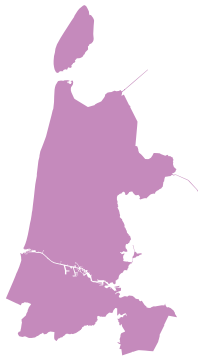
Schrijf onder elke vorm de juiste provincie.



1. ....



2. ....



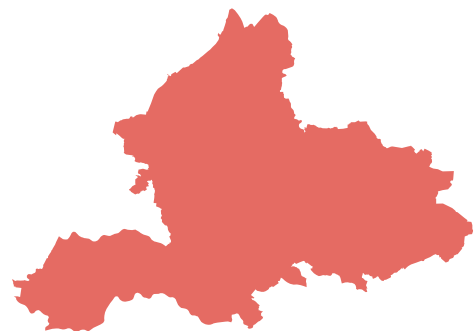
3. ....



4. ....

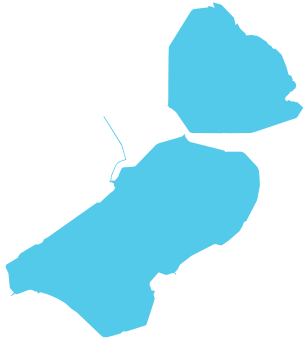


5. ....



6. ....

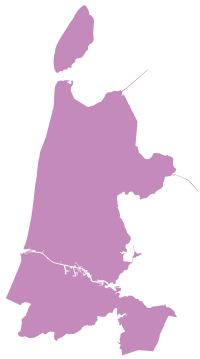
Schrijf onder elke vorm de juiste provincie.



1. .... *Flevoland* .....



2. .... *Zuid-Holland* .....



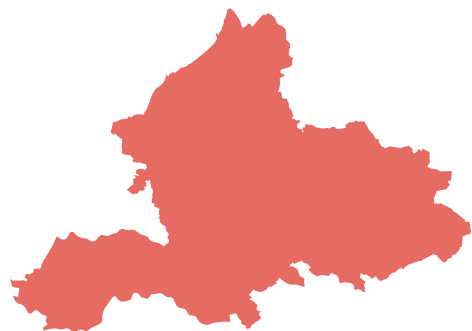
3. .... *Noord-Holland* .....



4. .... *Overijssel* .....



5. .... *Noord-Brabant* .....



6. .... *Gelderland* .....